




1. Écris les nombres manquants:

<table border="1" style="margin: 0 auto;"> <tr><td>283</td><td>...</td><td>...</td><td>286</td></tr> <tr><td></td><td>...</td><td>...</td><td></td></tr> <tr><td></td><td>...</td><td>...</td><td></td></tr> <tr><td></td><td>...</td><td>...</td><td></td></tr> <tr><td></td><td>289</td><td>...</td><td>292</td></tr> </table>  	283	286				289	...	292	<table border="1" style="margin: 0 auto;"> <tr><td>...</td><td>...</td><td>...</td><td>326</td></tr> <tr><td></td><td>...</td><td>...</td><td></td></tr> <tr><td></td><td>...</td><td>...</td><td></td></tr> <tr><td></td><td>...</td><td>...</td><td></td></tr> <tr><td>317</td><td>...</td><td>...</td><td>...</td></tr> </table> 	326			317
283	286																																						
																																							
																																							
																																							
	289	...	292																																						
...	326																																						
																																							
																																							
																																							
317																																						
<table border="1" style="margin: 0 auto;"> <tr><td>...</td><td>...</td><td>...</td></tr> <tr><td>...</td><td>...</td><td>...</td></tr> <tr><td>...</td><td>...</td><td>...</td></tr> <tr><td>449</td><td>...</td><td>...</td></tr> <tr><td>...</td><td>...</td><td>459</td></tr> </table>	449	459	<table border="1" style="margin: 0 auto;"> <tr><td>555</td><td>...</td><td>...</td></tr> <tr><td></td><td>...</td><td>...</td></tr> <tr><td></td><td>...</td><td>...</td></tr> <tr><td></td><td>...</td><td>...</td></tr> <tr><td></td><td>...</td><td>...</td></tr> <tr><td></td><td>...</td><td>565</td></tr> </table>	555	565							
...																																							
...																																							
...																																							
449																																							
...	...	459																																							
555																																							
																																							
																																							
																																							
																																							
	...	565																																							

2. Colorie les nombres identiques :

523	$500+20+3$	quatre - cent - quatre - vingt - quatre
$200+9$	209	$400+80+4$
	deux - cent - neuf	484
		cinq - cent - vingt - trois

3. Complète :

182	$100+80+2$
446	
287	
341	
	$200+40+5$
	$300+90+3$
	$400+50+7$
	$500+10+9$

